

KENDRIYA VIDYALAYA NAD KARANJA

SUMMER VACATION HOLIDAY HOMEWORK (2023-24)

CLASS- 4 (A/B/C)

SUBJECT- ENGLISH

- 1) WRITE AND LEARN ANY 20 OPPOSITE WORDS.
- 2) WRITE AND LEARN ANY 20 WORDS THAT HAVE SAME MEANINGS.
- 3) PRACTICE READING DAILY.
- 4) WRITE 5 LINES HANDWRITING DAILY.
- 5) PRACTICE ENGLISH SPEAKING.
- 6) WRITE 5 LINES ON THE TOPIC:-

“HOW DID I SPEND MY SUMMER VACATIONS.”

***Note:-**

- 1) Kindly do this holiday homework in separate 100 pages notebook.
- 2) Kindly take the print out of the worksheets.

SUBJECT: ENGLISH

LEVEL - 1

NAME:- _____

CLASS :-- 4 _____

SUBJECT : ENGLISH


Q1) Tick the naming word:-

a) Jagdish

b) Flower

c) bag

Q 2) Identify the action word and write:-



Q 3) Put the correct punctuation mark in the given sentence and rewrite:

a) Im very tired she said

Ans) _____

Q 4) Tick the correct rhyming word for :- Grow - _____

a) Joke

b) code

c) Flow

Q 5) Complete the lines on, " MY SCHOOL" with the help of given clues:-

Playground	KV NAD KARANJA	big	beautiful	Nad karanja
------------	-------------------	-----	-----------	-------------

- 1) My school name is _____.
- 2) It is a _____ school.
- 3) It has a big _____.
- 4) It is a _____ school.
- 5) It is situated in _____.

LEVEL - 2

Q 1) Tick the correct pairs of opposite words:-

a) Tall x light

b) Big x small

c) Happy x short

Q 2) Rewrite the sentence using the rule of ,” Capitalization”

a) mr.and mrs. hoofman went to London.

Ans) _____

Q 3) Write correct describing word for:-

He can run very _____. (Fast / hot)

Q 4) Classify the given words in singular

Plural or Singular

Name _____

Directions: Cut and paste the nouns into the correct box.

Plural Singular

letters bird flowers

friend hearts hand

treat home cards

A Planning Playtime product. ©2016 by Amy Nelson.

Q 5) Read the sentences and put them in sequence:-

Name: _____

Sequence

Directions: Read the sentences below. They are out of order. Write numbers into the squares to place the sentences in order. Write them in order below.

Plant a Seed

First, dig a hole in the soil.



Next, cover the seed with soil.

Last, let the seed grow in the sun.

Then, place a seed in the hole.

Then, sprinkle water on the soil.

1. _____

2. _____

3. _____

4. _____

5. _____

LEVEL - 3

Q 1) Punctuate the given sentence:

We are going to Mumbai

Ans) _____

Q 2) Write opposite of the given word:- long x _____

Q 3) Circle the naming words:-

1. Please have some hot coffee.

2. Where is my red pen?

3. My eat healthy food everyday.

4. My sister has long hair.

5. My uncle has three cars.




Q 4) Circle the rhyming words:

Fab	Bet	Bid	Big	Nab
Fad	Get	Did	Had	Dig
Rag	Jet	Wag	Hid	Fig
Fan	Let	Kid	Pan	Gig
Rap	Met	Sap	Lid	Pig

Q 5) Read the given passage carefully and answer the following questions:-

<https://whatistheurl.com/> Name : _____

I see an elephant.
He is huge and strong. And he has a long trunk.
His ears flap as he walks.



What do I see?

Elephants are huge and _____

How does an elephant use its ears?

<https://whatistheurl.com/>
Please visit our site for worksheets and charts <https://whatistheurl.com/>

SUBJECT- HINDI

- 1) प्रतिदिन एक अध्याय का अध्ययन करे एवं एक पेज सुलेख लिखिए ?
- 2) अपनी पुस्तक में से दो कविताएं याद करे

SUBJECT: HINDI

स्तर -१

निम्नलिखित शब्दों के लिंग बदलो।

- क) शेर
- ख) हंस
- ग) मोर
- घ) चोर
- ङ) भाई
- च) घोडा
- छ) बकरा
- ज) तोता
- झ) माता

स्तर -२

प्र 1 समान तुक वाले शब्द लिखो ।

मिठाई-----

पत्रे -----

सोने -----

धाता -----

प्र 2 समानार्थी शब्द लिखो ।

तस्वीर -----

पोथी -----

खलीता -----

धाता -----

क-मेरा विद्यालय एवं

ख - मेरा परिवार पर पांच - पांच वाक्य लिखिए ?

स्तर -३

विलोम (विपरीत) शब्द

विपरीत शब्द लिखो।

छोटा	X	_____
दूर	X	_____
नरम	X	_____
सीधा	X	_____
इधर	X	_____
रात	X	_____
सुबह	X	_____

विपरीत शब्द पर गोला लगाओ।


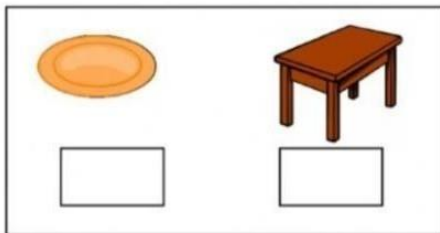
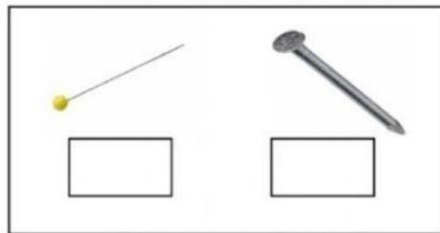
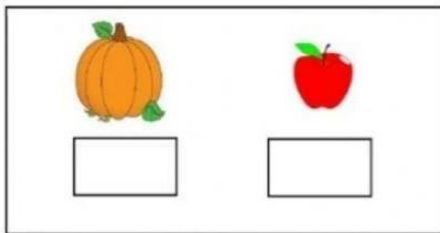
रात -	सुबह	शाम	दिन	कल
नरम -	गरम	शर्म	ठंडा	धुप
छोटा -	बड़ा	खोटा	मोटा	सीधा
ठंडा -	गरम	नरम	पीला	गोरा

SUBJECT- MATH

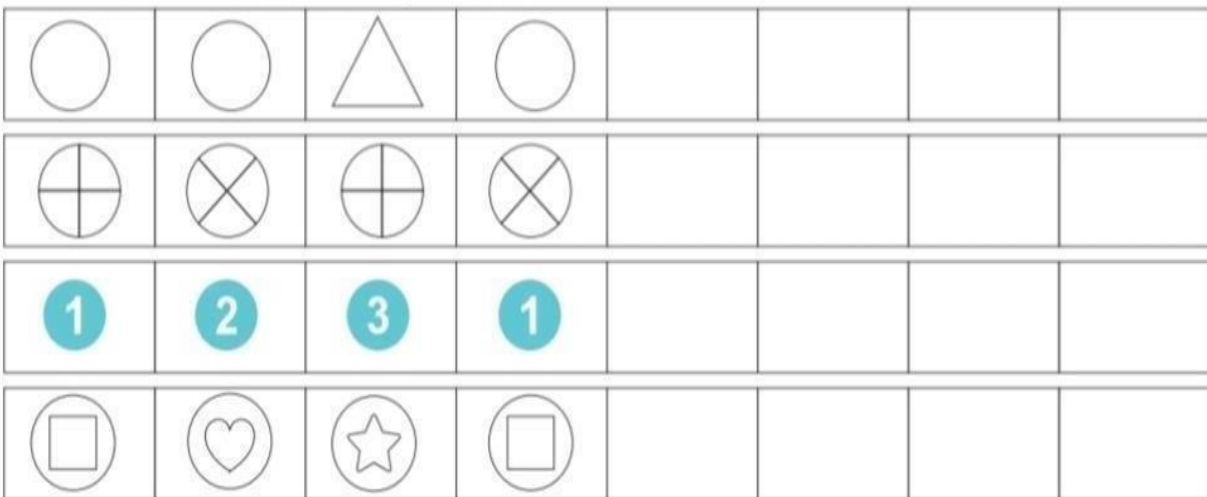
SUBJECT: HINDI

LEVEL – 1

1. Tick the heavy objects:-



2. Draw the next four patterns:-



3. Add the following:-

$$\begin{array}{r} 18 \\ + 11 \\ \hline \end{array}$$

$$\begin{array}{r} 10 \\ + 12 \\ \hline \end{array}$$

$$\begin{array}{r} 91 \\ + 14 \\ \hline \end{array}$$

$$\begin{array}{r} 15 \\ + 13 \\ \hline \end{array}$$

$$\begin{array}{r} 17 \\ + 20 \\ \hline \end{array}$$

$$\begin{array}{r} 61 \\ + 32 \\ \hline \end{array}$$

$$\begin{array}{r} 41 \\ + 41 \\ \hline \end{array}$$

$$\begin{array}{r} 90 \\ + 10 \\ \hline \end{array}$$

4. Subtract the following:-

$$\begin{array}{r} 31 \\ - 21 \\ \hline \\ \hline \end{array}$$

$$\begin{array}{r} 75 \\ - 32 \\ \hline \\ \hline \end{array}$$

$$\begin{array}{r} 23 \\ - 12 \\ \hline \\ \hline \end{array}$$

$$\begin{array}{r} 20 \\ - 10 \\ \hline \\ \hline \end{array}$$


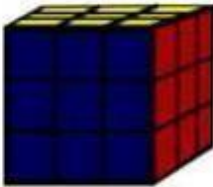
$$\begin{array}{r} 99 \\ - 88 \\ \hline \\ \hline \end{array}$$

$$\begin{array}{r} 75 \\ - 25 \\ \hline \\ \hline \end{array}$$

$$\begin{array}{r} 27 \\ - 17 \\ \hline \\ \hline \end{array}$$

$$\begin{array}{r} 30 \\ - 10 \\ \hline \\ \hline \end{array}$$

4. Match the shapes with the objects:-



LEVEL - 2

1. Circle the correct word:-



heavier

lighter

The apple is _____ than the strawberry



heavier

as heavy as

The lemon is _____ the pear



heavier

lighter

The bird is _____ than the frog



as heavy as

lighter

The can is _____ the ice-cream

2. Complete the number patterns:-

(a) 13, 23, 33, 43, _____, _____ (b) 44, 55, 66, 77, _____, _____

(c) 16, 23, 30, 37, _____, _____ (d) 42, 48, 54, 60, _____, _____

(e) 23, 34, 45, 56, _____, _____ (f) 4, 8, 12, 16, _____, _____

(g) 8, 15, 22, 29, _____, _____ (h) 30, 50, 70, 90, _____, _____

3. Add the following:-

(a)

\square	\bigcirc	\triangle
100	10	1
5	4	2
+	4	3
7	7	
<hr/>		

(b)

\square	\bigcirc	\triangle
100	10	1
2	1	7
+	6	3
1	1	
<hr/>		

(d)

\square	\bigcirc	\triangle
100	10	1
2	5	8
+	2	1
0	0	
<hr/>		

(e)

\square	\bigcirc	\triangle
100	10	1
4	4	2
+	4	2
4	4	
<hr/>		

4. Find the missing numbers:-

	3	9	2
-		4	
	1		5

	6	0	1
-		5	5
	0		

	7		5
-	5	9	4
			1

	2	4	6
-		5	
	1		6

5. Write all the numbers between:-(4 marks)

i) 1007 and 1009 _____

ii) 2333 and 2335 _____

iii) 3554 and 3556 _____

iv) 1205 and 1209 _____

LEVEL - 3

1. Classify the following objects as standing, sleeping, curved or new:-

(a)



(b)



(c)



(d)



(e)



(f)




(g)





(h)




2. Fill in the blanks:-

(a)  There are ____ plates.
There are ____ slices in each plate.
There are ____ slices in all plates.

(b)  There are ____ groups.
There are ____ balloons in each groups.
There are ____ balloons in all groups.

(c)  There are ____ matchboxes.
There are ____ matchsticks in each matchboxes.
There are ____ matchsticks in all matchboxes.

(d)  There are ____ plates.
There are ____ puris in each plate.
There are ____ puris in all plates.


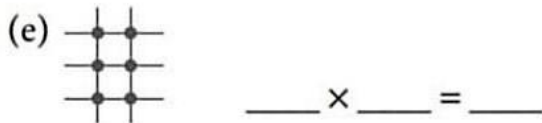
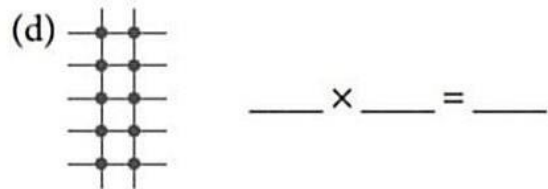
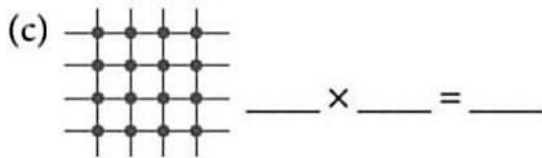
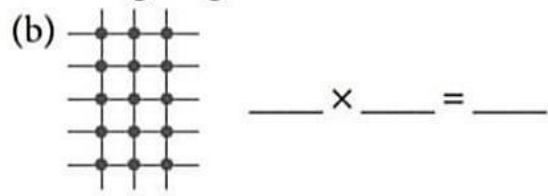
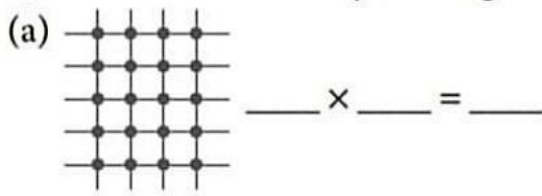
3. Answer the following questions: -

CALENDAR





February-2011						
SUN	MON	TUE	WED	THU	FRI	SAT
		1	2	3	4	5
6	7	8	9	10	11	12
13	14	15	16	17	18	19
20	21	22	23	24	25	26
27	28					

- (1) What day of the week is February 28?
- (2) What day of the week is February 20?
- (3) What date is the second Saturday in February?
- (4) What date is the third Monday in February?

4. Fill in the blanks by looking at the following diagram:-



5. Complete the following division equations:-

1.	$40 - 10 - 10 - 10 - 10 = 0$		$40 \div 10 = 4$
2.	$44 - 11 - 11 - 11 - 11 = 0$		
3.	$21 - 7 - 7 - 7 = 0$		
4.	$54 - 9 - 9 - 9 - 9 - 9 - 9 = 0$		

SUBJECT : EVS

LEVEL- 1

1. Fill in the blanks: -


There are members in my family.

My family is a Family. (big/ small/ nuclear/joint)

There are Members in my friend's family.

His/ her family is a Family. (big//small/nuclear/joint)

2. Draw a picture of a way that you can save water: -



3. Given below are the incorrect sentences about uses of water. Write the correct sentences:

1. We bath in kitchen.
2. We sleep in bathroom.
3. We cook in bedroom.
4. Our guests sit in Pooja room.

4. Write the names of two leaves used as medicine: -

5. Write the names of three food items that we get from Plants.

LEVEL- 2

1.What do you mean by rainwater harvesting?

2.Write about the parts of your houses.


3.What the does the following traffic lights indicate-

(i) Red

(ii) Yellow

(iii) Green

4.Draw a picture of traffic signal with all the three lights.



LEVEL- 3

1. Divide the given means of transport in various groups on the basis of FUEL they use. You can add means of transport on your own too.



a. *Vehicles which use petrol*

.....

b. *Vehicles which use diesel*

.....

c. *Vehicles which run on electric power*

.....

d. *Vehicles which run on man/ animal power*

.....

2. Match the cooking methods with its definition

boil	→	cook in hot water
fry		cook over steam from hot water
bake		cook over a direct flame or under heat
roast		cook meat or vegetables in the oven
steam		cook pies or cakes in the oven
grill		cook in hot oil

3. Write the name of some items which can be eaten by the old people.

4. What is rain water harvesting? Draw a picture and explain.



Class :- IV (All Section)

Subject :- Computer

Sr. No.	Topic
1.	Write Do's and Don'ts while working on computer in lab/ in home.
2.	collect the pictures of "Input and Output devices "from magazines, Newspaper and Internet and paste them in your notebook.
3.	Write the functions of – 1. Alphabetical keys 2. Number keys 3. Function keys

❖ **Kindly do this holiday homework in your regular computer notebook.**

❖ **Submit completed copy of homework on very first day after reopening of the Vidyalaya.**

❖ **"wish you all very happy vacations".**

